


Maths Quiz—Level 1

1. Wendy has four books in her reading folder. Her teacher gives her three more. How many books does she have now?

Attempt 1: _____

Attempt 2: _____

Attempt 3: _____




Maths Quiz—Level 1

1. Wendy has four books in her reading folder. Her teacher gives her three more. How many books does she have now?

Attempt 1: _____

Attempt 2: _____

Attempt 3: _____



Maths Quiz—Level 1

1. Wendy has four books in her reading folder. Her teacher gives her three more. How many books does she have now?

Attempt 1: _____

Attempt 2: _____

Attempt 3: _____




Maths Quiz—Level 1

2. Peter goes fishing with his Dad. Peter catches 3 small fish and his Dad catches 3 big fish. How many fish did they catch?

Attempt 1: _____

Attempt 2: _____

Attempt 3: _____




Maths Quiz—Level 1

2. Peter goes fishing with his Dad. Peter catches 3 small fish and his Dad catches 3 big fish. How many fish did they catch?

Attempt 1: _____

Attempt 2: _____

Attempt 3: _____




Maths Quiz—Level 1

2. Peter goes fishing with his Dad. Peter catches 3 small fish and his Dad catches 3 big fish. How many fish did they catch?

Attempt 1: _____

Attempt 2: _____

Attempt 3: _____



Maths Quiz—Level 1

3. Sarah cooks 8 boiled eggs for breakfast. James and Julie eat one each. How many eggs are left?

Attempt 1: _____

Attempt 2: _____

Attempt 3: _____



Maths Quiz—Level 1

3. Sarah cooks 8 boiled eggs for breakfast. James and Julie eat one each. How many eggs are left?

Attempt 1: _____

Attempt 2: _____

Attempt 3: _____




Maths Quiz—Level 1

3. Sarah cooks 8 boiled eggs for breakfast. James and Julie eat one each. How many eggs are left?

Attempt 1: _____

Attempt 2: _____

Attempt 3: _____



Maths Quiz—Level 1

4. When Pippa goes to bed at night, she has 3 easter eggs in her bedroom. While she is asleep her mother gives her some more easter eggs. She wakes up in the morning to find she has 5 easter eggs altogether. How many eggs did her mother give her?

Attempt 1: _____

Attempt 2: _____

Attempt 3: _____



Maths Quiz—Level 1

4. When Pippa goes to bed at night, she has 3 easter eggs in her bedroom. While she is asleep her mother gives her some more easter eggs. She wakes up in the morning to find she has 5 easter eggs altogether. How many eggs did her mother give her?

Attempt 1: _____

Attempt 2: _____

Attempt 3: _____



Maths Quiz—Level 1

4. When Pippa goes to bed at night, she has 3 easter eggs in her bedroom. While she is asleep her mother gives her some more easter eggs. She wakes up in the morning to find she has 5 easter eggs altogether. How many eggs did her mother give her?

Attempt 1: _____

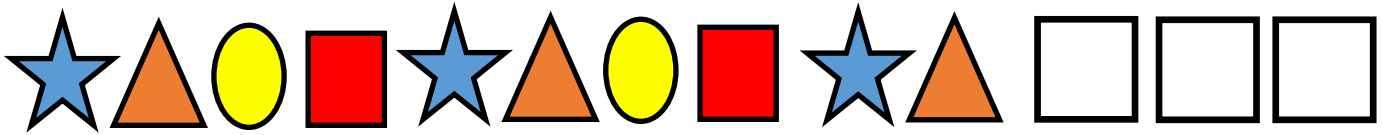
Attempt 2: _____

Attempt 3: _____



Maths Quiz—Level 1

5. What are the next three shapes in the pattern?



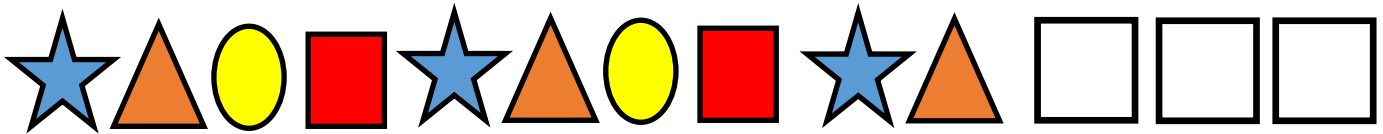
Attempt 1: _____

Attempt 2: _____

Attempt 3: _____

Maths Quiz—Level 1

5. What are the next three shapes in the pattern?



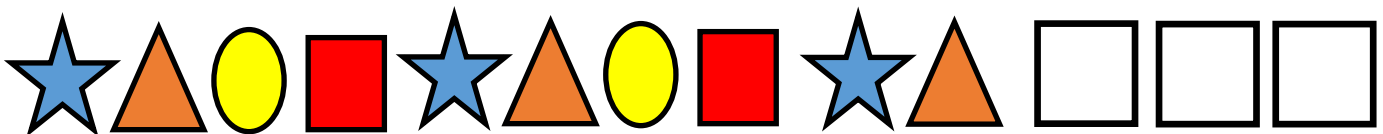
Attempt 1: _____

Attempt 2: _____

Attempt 3: _____

Maths Quiz—Level 1

5. What are the next three shapes in the pattern?



Attempt 1: _____

Attempt 2: _____

Attempt 3: _____

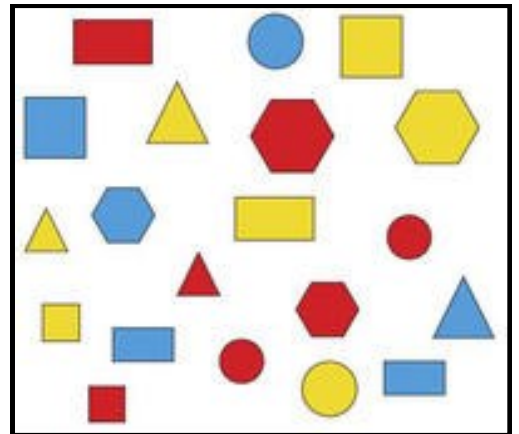
Maths Quiz—Level 1

6. If you were to sort the blocks into a feature that was the same. How would you sort them?

Attempt 1: _____

Attempt 2: _____

Attempt 3: _____



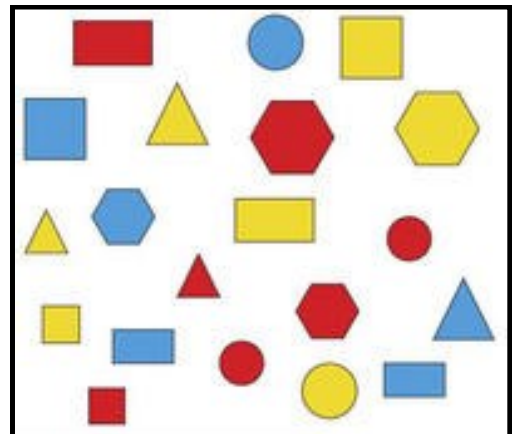
Maths Quiz—Level 1

6. If you were to sort the sort the blocks into a feature that was the same. How would you sort them?

Attempt 1: _____

Attempt 2: _____

Attempt 3: _____



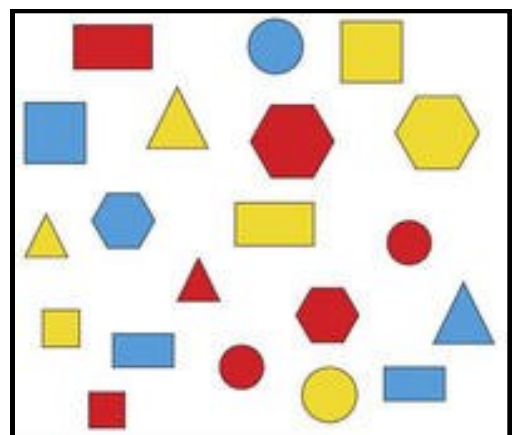
Maths Quiz—Level 1

6. If you were to sort the sort the blocks into a feature that was the same. How would you sort them?

Attempt 1: _____

Attempt 2: _____

Attempt 3: _____




Maths Quiz—Level 1

7. You need to put the animals in order from the most to the least. What is the order?

Attempt 1: _____

Attempt 2: _____

Attempt 3: _____




Maths Quiz—Level 1

7. You need to put the animals in order from the most to the least. What is the order?

Attempt 1: _____

Attempt 2: _____

Attempt 3: _____




Maths Quiz—Level 1

7. You need to put the animals in order from the most to the least. What is the order?

Attempt 1: _____

Attempt 2: _____

Attempt 3: _____



Maths Quiz—Level 1

8. Charlotte has \$7 and she buys an ice cream for \$2. How much money does she have left?

Attempt 1: _____

Attempt 2: _____

Attempt 3: _____



Maths Quiz—Level 1

8. Charlotte has \$7 and she buys an ice cream for \$2. How much money does she have left?

Attempt 1: _____

Attempt 2: _____

Attempt 3: _____



Maths Quiz—Level 1

8. Charlotte has \$7 and she buys an ice cream for \$2. How much money does she have left?

Attempt 1: _____

Attempt 2: _____

Attempt 3: _____



Maths Quiz—Level 1

9. Fiona has 7 teddy bears and he gives 3 of them to a friend.

How many teddy bears does she have now?

Attempt 1: _____

Attempt 2: _____

Attempt 3: _____



Maths Quiz—Level 1

9. Fiona has 7 teddy bears and he gives 3 of them to a friend.

How many teddy bears does she have now?

Attempt 1: _____

Attempt 2: _____

Attempt 3: _____



Maths Quiz—Level 1

9. Fiona has 7 teddy bears and he gives 3 of them to a friend.

How many teddy bears does she have now?

Attempt 1: _____

Attempt 2: _____

Attempt 3: _____



Maths Quiz—Level 1

10. Diane has \$9 in her purse. She buys a drink and a chocolate bar at the shop. When she gets home she has \$3 in her purse. How much did she spend at the shop?

Attempt 1: _____

Attempt 2: _____

Attempt 3: _____



Maths Quiz—Level 1

10. Diane has \$9 in her purse. She buys a drink and a chocolate bar at the shop. When she gets home she has \$3 in her purse. How much did she spend at the shop?

Attempt 1: _____

Attempt 2: _____

Attempt 3: _____



Maths Quiz—Level 1

10. Diane has \$9 in her purse. She buys a drink and a chocolate bar at the shop. When she gets home she has \$3 in her purse. How much did she spend at the shop?

Attempt 1: _____

Attempt 2: _____

Attempt 3: _____



Maths Quiz—Level 1

11. Dana has 14 snack packs, and he eats one every day of the week for his lunch. How many packets does he have left at the end of one week?

Attempt 1: _____

Attempt 2: _____

Attempt 3: _____



Maths Quiz—Level 1

11. Dana has 14 snack packs, and he eats one every day of the week for his lunch. How many packets does he have left at the end of one week?

Attempt 1: _____

Attempt 2: _____

Attempt 3: _____



Maths Quiz—Level 1

11. Dana has 14 snack packs, and he eats one every day of the week for his lunch. How many packets does he have left at the end of one week?

Attempt 1: _____

Attempt 2: _____

Attempt 3: _____



Maths Quiz—Level 1

12. A chocolate rolo packet contains 10 chocolates. If Shelly has 5 packets and her sister Kate has 4 packets. How many chocolates do they have altogether?

Attempt 1: _____

Attempt 2: _____

Attempt 3: _____



Maths Quiz—Level 1

12. A chocolate rolo packet contains 10 chocolates. If Shelly has 5 packets and her sister Kate has 4 packets. How many chocolates do they have altogether?

Attempt 1: _____

Attempt 2: _____

Attempt 3: _____



Maths Quiz—Level 1

12. A chocolate rolo packet contains 10 chocolates. If Shelly has 5 packets and her sister Kate has 4 packets. How many chocolates do they have altogether?

Attempt 1: _____

Attempt 2: _____

Attempt 3: _____



Maths Quiz—Level 1

Answer Sheet

Year 1 Questions

1. $4 + 3 = 7$
2. $3 + 3 = 6$
3. $8 - 2 = 6$
4. $3 + 2 = 5$
5. Circle square star
6. They can be sorted by colour, shape or size

Year 2 Questions

7. Monkeys, Zebras Elephants Lions
8. $\$7 - \$2 = \$5.00$
9. $7 - 3 = 4$
10. $\$9 - \$3 = \$6.00$
11. $14 - 7 = 7$
12. $50 + 40 = 90$

Maths Quiz—Level 1 Score Sheet

	Group 1	Group 2	Group 3	Group 4	Group 5	Group 6
1						
2						
3						
4						
5						
6						
7						
8						
9						
10						
11						
12						
13						
14						
15						
16						
17						
18						
19						
20						
Total						